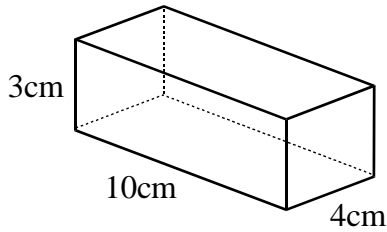
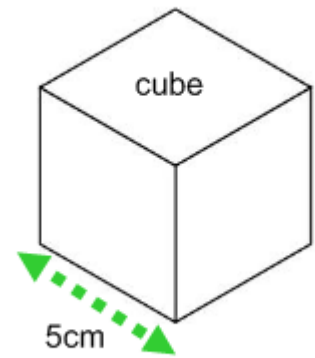


Q1. Calculate the volume of the following:

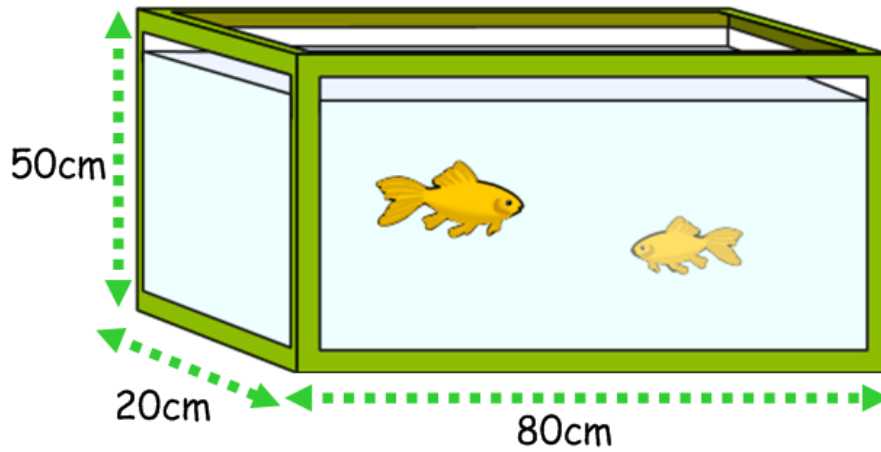
(a)



(b)




Q2. Calculate the capacity of the cuboid shaped tank below in litres



Q3. This container on a lorry is a cuboid with a length of 10m, a breadth of 3m and a volume of  $120\text{m}^3$ .

Calculate the height of the container.



Q4. Calculate the volume of this Toblerone box that is in the shape of a triangular prism

